

Name: _____

Per: _____

Remediation Assignment

Determine if the following compounds are (s)alts or (m)olecules.

S CaCl₂

M H₂O

M HCl

M O₂

S NaF

M CO

S KBr

S AlCl₃

In each compound, circle the more electronegative element.

CaCl

HO

HCl

NH₃

NaF

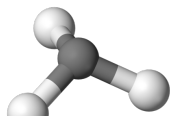
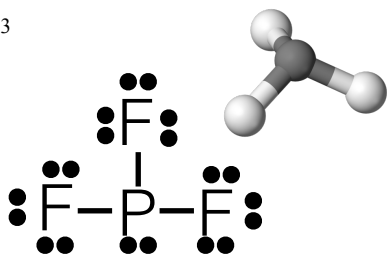
CO

KBr

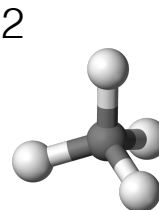
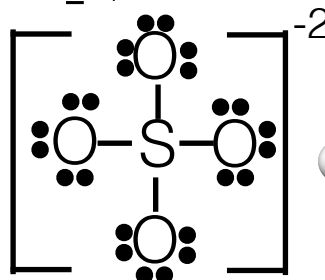
AlCl₃

Draw the following LDMS, then draw a line connecting it with the model that represents its 3 dimensional shape.

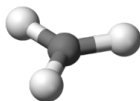
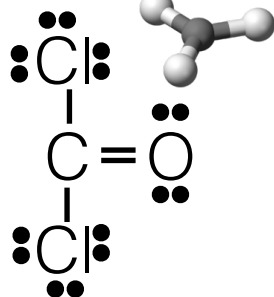
PF₃



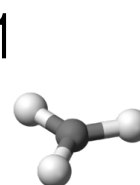
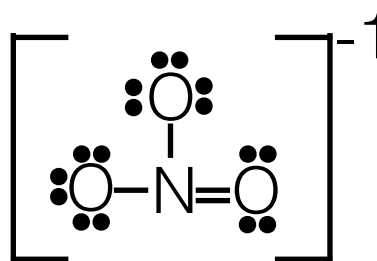
SO₄⁻²



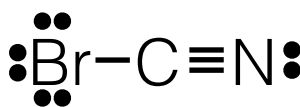
CCl₂O



NO₃⁻¹



BrCN



CO

